

# Transition to College Math

## Guided Practice

## Unit 3 Lesson 1

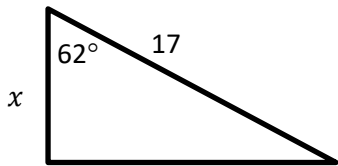
## Right Angle Trigonometry

---

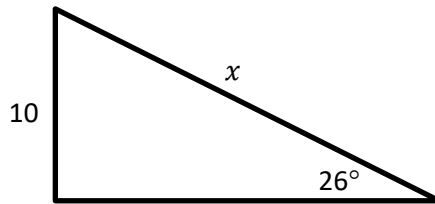
Name \_\_\_\_\_ Date \_\_\_\_\_ Period \_\_\_\_\_

Find the value of  $x$  in each figure. Round your answer to the nearest tenth.

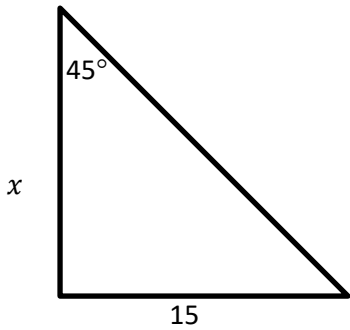
1. \_\_\_\_\_



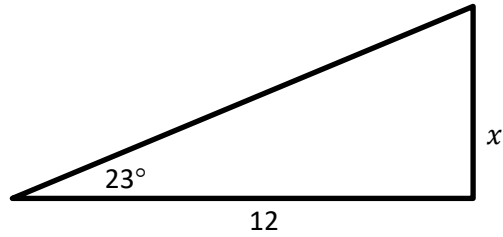
4. \_\_\_\_\_



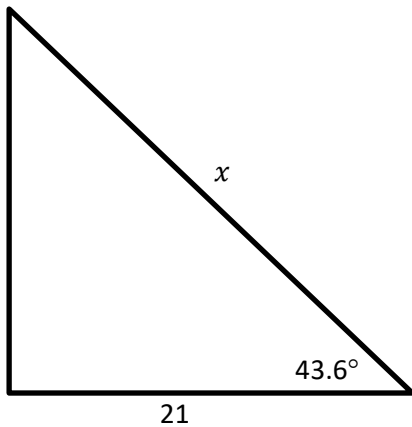
2. \_\_\_\_\_



5. \_\_\_\_\_



3. \_\_\_\_\_



6. \_\_\_\_\_

